

Time: 10 Minutes

Paper Math 4

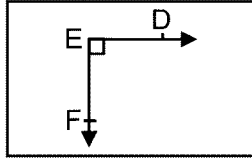
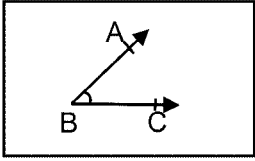
Total Marks: 10

6th Month, 1st Week, 2nd Day | Syllabus: Unit 6: Exercise – 2 Q No. 1, 2

Q.No.1. Write the type of angles in the following:

(5)

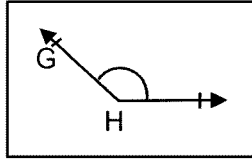
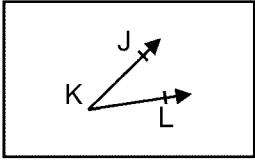
سوال نمبر 1: درج ذیل زاویوں کی اقسام لکھیں:



Q.No.2. Write the type of angles in the following:

(5)

سوال نمبر 2: درج ذیل زاویوں کی اقسام لکھیں:



Time: 10 Minutes

Paper Math 4

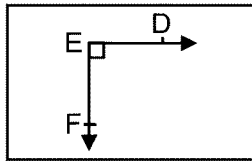
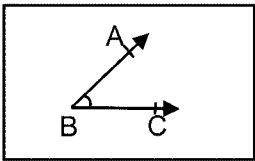
Total Marks: 10

6th Month, 1st Week, 2nd Day | Syllabus: Unit 6: Exercise – 2 Q No. 1, 2

Q.No.1. Write the type of angles in the following:

(5)

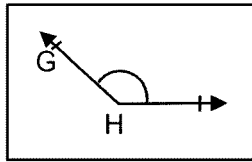
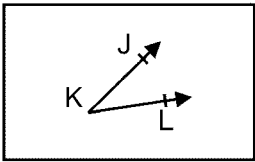
سوال نمبر 1: درج ذیل زاویوں کی اقسام لکھیں:



Q.No.2. Write the type of angles in the following:

(5)

سوال نمبر 2: درج ذیل زاویوں کی اقسام لکھیں:

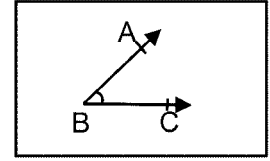


Time: 10 Minutes

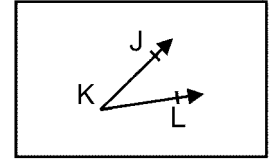
Paper M

6th Month, 1st Week, 2nd Day | Syllabus:

Q.No.1. Write the type of angles in the f



Q.No.2. Write the type of angles in the f

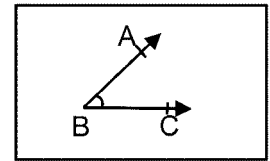


Time: 10 Minutes

Paper M

6th Month, 1st Week, 2nd Day | Syllabus:

Q.No.1. Write the type of angles in the f



Q.No.2. Write the type of angles in the f

